

Scheme – I

Sample Question Paper

Program Name : Electronics Engineering Programme Group
Program Code : DE/EJ/ET/EN/EX/EQ/IE/IS/IC
Semester : Fourth
Course Title : Linear Integrated Circuits
Marks : 70

22423

Time: 3 Hrs.

Instructions:

- (1) All questions are compulsory.
- (2) Illustrate your answers with neat sketches wherever necessary.
- (3) Figures to the right indicate full marks.
- (4) Assume suitable data if necessary.
- (5) Preferably, write the answers in sequential order.

Q.1) Attempt any FIVE of the following: -

10 Marks

- (a) State ideal and practical value of given parameters for Op-Amp IC 741.
 - 1) Input offset voltage
 - 2) CMRR
- (b) Draw circuit diagram Op-Amp based basic integrator.
- (c) List four specifications of LM 324.
- (d) Define following terms related with filter.
 - i. Cut - off frequency
 - ii. Stop band
- (e) State the use of Schmitt trigger.
- (f) Draw labeled pin diagram of IC - 555.
- (g) State the classification of filters based on frequency response.

Q.2) Attempt any THREE of the following: -

12 Marks

- (a) Draw the block diagram of OP-AMP and state the functions of each block.
- (b) Draw the input output waveform of inverting zero crossing detector with sine wave input of amplitude $3V_{PP}$.
- (c) Describe the operation of multiplier using PLL with the help of block diagram.

- (d) Obtain the output voltage for the open loop differential amplifier for $V_{in1}=10\text{mV rms}$, $V_{in2}=20\text{mV rms}$. Assume Op-Amp is 741, voltage swing= $\pm 14\text{v}$. Sketch the output waveform.

Q.3) Attempt any THREE of the following.

12 Marks

- Explain the concept of frequency compensation of Op-Amp and offset nulling?
- Draw the circuit diagram of Op-Amp based log amplifier and obtain the expression for its output voltage.
- Sketch first order Butterworth low pass filter with appropriate component value at a cut-off frequency 10 KHz with pass band gain 2.
- Describe the procedure to vary output frequency of IC-555 based voltage controlled oscillator with appropriate sketch

Q.4) Attempt any THREE of the following.

12 Marks

- Identify and draw the Op-Amp based circuit to perform below operation. (refer fig1)

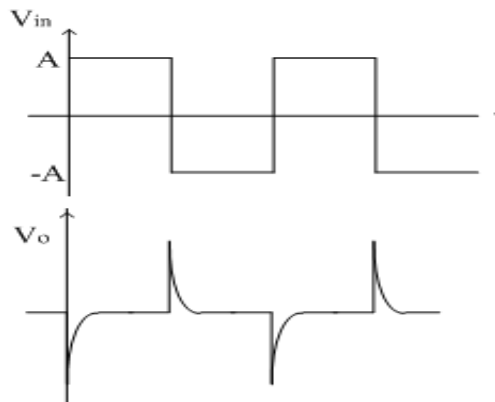


Fig. 1

- Explain the procedure to null the offset voltage with appropriate sketch.
- For the following equation, sketch the circuit diagram and output waveform for square wave input.

$$V_o = -\frac{1}{RC} \int_0^t V_{in} dt + C$$

- Explain the operation of instrumentation amplifier using three Op-Amps with neat sketch.
- Sketch IC-555 based monostable multivibrator for pulse width $t_p = 10 \text{ ms}$.

Q.5) Attempt any TWO of the following.

12 Marks

- (a) If $R_2 = 150\text{K}\Omega$, $R_1 = 100\text{K}\Omega$, $V_{in} = 500\text{mV}$ Sine wave, saturation voltage = $\pm 15\text{V}$, for a Op-Amp based Schmitt trigger. Find Threshold Voltage V_{UTP} , V_{LTP} and hysteresis voltage.
- (b) Identify and draw the Op-Amp based filter circuit to fulfill following frequency response(refer fig2)

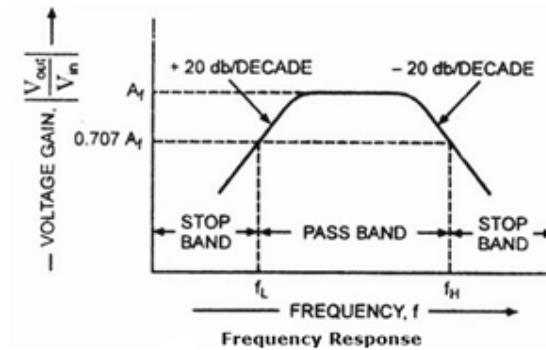


Fig. 2

- (c) Sketch output signal along with input signal as sine wave of 2V peak to peak for following Op-Amp based circuits with ideal conditions.
 - i. Inverting amplifier with gain 5.
 - ii. Positive peak detector
 - iii. Active integrator.
 - iv. Non inverting zero crossing detectors.
 - v. Non inverting unity gain amplifier.
 - vi. Active differentiator.

Q.6) Attempt any TWO of the following.

12 Marks

- (a) For the given circuit, obtain the output voltage expression.(refer fig3)

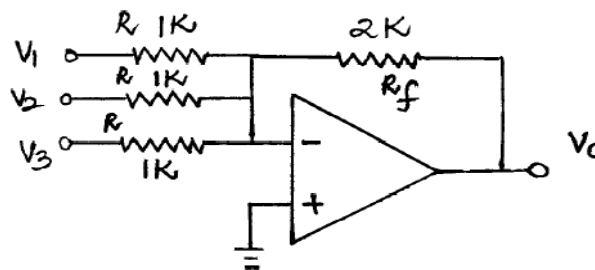


Fig. 3

- (b) Explain the operation of sample and hold circuit with neat sketch and its input, output waveform?
- (c) Sketch second order Butterworth high pass filter with appropriate component value at a cut-off frequency 10 KHz.

Scheme – I

Sample Test Paper - I

Program Name : Electronics Engineering Programme Group
Program Code : DE/EJ/ET/EN/EX/EQ/IE/IS/IC
Semester : Fourth
Course Title : Linear Integrated Circuits
Marks : 20

22423

Time: 1 Hour

Instructions:

- (1) All questions are compulsory.
- (2) Illustrate your answers with neat sketches wherever necessary.
- (3) Figures to the right indicate full marks.
- (4) Assume suitable data if necessary.
- (5) Preferably, write the answers in sequential order.

Q.1 Attempt any FOUR.

08 Marks

- (a) Draw equivalent circuit of Op-Amp
- (b) Draw labeled pin diagram of IC 741.
- (c) Draw circuit diagram of non-inverting adder with 3 inputs.
- (d) Draw input and output waveform, when the sine input signal is applied to the inverting input terminal of Op-Amp.
- (e) Draw the circuit diagram of voltage to current converter with grounded load.

Q.2 Attempt any THREE.

12 Marks

- (a) Draw block diagram of Op-Amp. Describe the function of each block in brief.
- (b) Draw the circuit diagram of inverting amplifier and obtained its output voltage expression.
- (c) Draw the output waveform for sine wave input of amplitude 3Vp-p. (Refer Fig1)

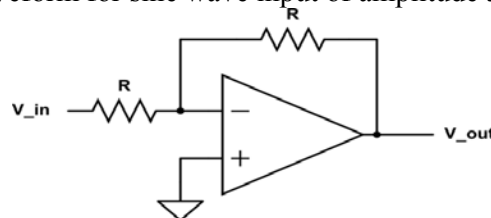


Fig. 1

- (d) Explain the working of window detector with neat sketch.

Scheme – I

Sample Test Paper - II

Program Name : Electronics Engineering Programme Group
Program Code : DE/EJ/ET/EN/EX/EQ/IE/IS/IC
Semester : Fourth
Course Title : Linear Integrated Circuits
Marks : 20

22423

Time: 1 Hour

Instructions:

- (1) All questions are compulsory.
- (2) Illustrate your answers with neat sketches wherever necessary.
- (3) Figures to the right indicate full marks.
- (4) Assume suitable data if necessary.
- (5) Preferably, write the answers in sequential order.

Q.1 Attempt any FOUR.

08 Marks

- (a) State the importance of hysteresis.
- (b) Define following terms related with filter.
 - i. Cut - off frequency
 - ii. Stop band
- (c) Draw ideal and practical response of band reject filter with proper labeling.
- (d) Define lock range and capture range of PLL.
- (e) Draw labeled pin diagram of IC - 565.

Q.2 Attempt any THREE.

12 Marks

- (a) Draw the diagram of log amplifier using op - amp and obtain expression for its output voltage.
- (b) Explain the circuit diagram of Op-Amp based phase shift oscillator with neat sketch.
- (c) Sketch Op-Amp based Wein Bridge Oscillator with appropriate value for frequency 1 kHz.
- (d) Obtain pulse width of output of IC-555 based monostable multivibrator for $c = 0.047\mu\text{F}$ and $R = 56\text{K}$.