



**MAHARASHTRA STATE BOARD OF TECHNICAL EDUCATION**  
(Autonomous)  
(ISO/IEC-27001-2013 Certified)

**Winter – 2019 Examinations**

**Model Answers**

**Subject & Code: Electric Motors and Transformers (22418)**

Important Instructions to examiners:

- 1) The answers should be examined by key words and not as word-to-word as given in the model answer scheme.
- 2) The model answer and the answer written by candidate may vary but the examiner may try to assess the understanding level of the candidate.
- 3) The language errors such as grammatical, spelling errors should not be given more importance (Not applicable for subject English and Communication Skills).
- 4) While assessing figures, examiner may give credit for principal components indicated in the figure. The figures drawn by candidate and model answer may vary. The examiner may give credit for any equivalent figure drawn.
- 5) Credits may be given step wise for numerical problems. In some cases, the assumed constant values may vary and there may be some difference in the candidate's answers and model answer.
- 6) In case of some questions credit may be given by judgement on part of examiner of relevant answer based on candidate's understanding.
- 7) For programming language papers, credit may be given to any other program based on equivalent concept.



MAHARASHTRA STATE BOARD OF TECHNICAL EDUCATION  
(Autonomous)  
(ISO/IEC-27001-2013 Certified)

Winter – 2019 Examinations

Model Answers

Subject & Code: Electric Motors and Transformers (22418)

- 1 Attempt any **FIVE** of the following: 10
- 1 a) State Fleming's Right Hand Rule.  
**Ans:**  
**Fleming's Right Hand Rule:**  
Stretch out the first three fingers of your right hand such that they are mutually perpendicular to each other. If first finger indicates direction of magnetic field, thumb indicates direction of motion of conductor with respect to magnetic field, then the middle finger will indicate the direction of induced EMF / current. 2 Marks
- 1 b) State the working principle of DC generator.  
**Ans:**  
**Working principle of DC generator:**
- Working principle of DC generator is the principle of dynamically induced emf or electromagnetic induction. 2 Marks
  - According to this principle, when flux is cut by a conductor, an emf is induced in the conductor.
  - In case of DC generator, when armature winding is rotated in magnetic field by the prime mover, the flux is cut by the armature winding and an emf is dynamically induced in it.
- 1 c) "DC series motor should never be started at no load". Justify.  
**Ans:**  
**"DC series motor should never be started at no load"- Justification**
- At no load, the field current (which is also the armature current) is very small and hence the useful air-gap field flux is also very small. 2 Marks
  - As  $Speed N \propto \frac{1}{flux}$  the speed rises excessively high / dangerous values and it is mechanically very harmful for machine.
  - At high speeds, due to centrifugal forces of the rotating parts, they may damage the machine.
- Hence DC series motor should never be started at no-load.
- 1 d) State why a transformer always have an efficiency of more than 90%.  
**Ans:**  
As transformer is static device with no moving parts, the losses due to friction & windage are completely absent. Hence transformer has efficiency of more than 90%. 2 Marks
- 1 e) Give the specification of three phase transformer as per IS 1180 (Part-1) 1989 (any four).  
**Ans:**  
**Specification of 3-phase transformer as per IS 1180 (Part-1) 1989:** ½ Mark for each of any four specification = 2 Marks
- 1) kVA rating of transformer
  - 2) Voltage ratings for the primary and secondary voltages
  - 3) HV and LV currents
  - 4) Operating frequency of the transformer
  - 5) % impedance of transformer



Winter – 2019 Examinations

Model Answers

**Subject & Code: Electric Motors and Transformers (22418)**

- 6) Allowable temperature rise.
- 7) Wiring instructions for HV and LV windings/terminal diagram
- 8) Model number and serial number of the transformer
- 9) Weight of the transformer
- 10) Information related to the tap changer
- 11) Transformer vector group
- 12) Winding connection diagrams
- 13) Type of cooling
- 14) Insulation class
- 15) Name of the manufacturer
- 16) Weight of core
- 17) Weight of winding
- 18) Volume of oil in litres.

- 1 f) State two applications of isolation transformer.

**Ans:**

**Applications of isolation transformer:**

- i) Isolates the load equipment from supply ground:
- ii) Reduction of voltage spikes
- iii) It acts as a decoupling device.
- iv) Protects loads from harmonic distortion.

1 Mark for each of any two applications = 2 Marks

- 1 g) List two special feature of welding transformer.

**Ans:**

**Special features of welding transformer:**

- i) It is a step down transformer that reduces the source voltage to a voltage desired according to the demands of the welding process.
- ii) Having large primary turns and less secondary turns.
- iii) The secondary current is quite high.
- iv) The secondary has several taps for adjusting the secondary voltage to control the welding current.
- v) The transformer is normally large in size compared to other step down transformers as the windings are of a much larger gauge.
- vi) Common ratings:
  - i) Primary voltage – 230 V, 415 V
  - ii) Secondary voltage – 40 to 60 V
  - iii) Secondary current – 200 to 600 A

1 Mark for each of any two features = 2 Marks

- 2 Attempt any **THREE** of the following:

12

- 2 a) Explain the working principle of induction motor.

**Ans:**

**Working principle of induction motor:**

- When the motor is excited with three-phase supply, three-phase stator winding carries three-phase currents & produces a rotating magnetic field of constant magnitude and rotates at synchronous speed.
- This changing magnetic field is cut by the rotor conductors and induces emf in



**Winter – 2019 Examinations**

**Model Answers**

**Subject & Code: Electric Motors and Transformers (22418)**

them according to Faraday’s laws of electromagnetic induction. As these rotor conductors are shorted, the current starts to flow through these conductors.

4 Marks for step-wise answer

- These current carrying rotor conductors are now in the rotating magnetic field produced by stator. Consequently, mechanical force acts on rotor conductors. The sum of the mechanical forces on all the rotor conductors produces a torque, which tend to move the rotor in the same direction as the rotating magnetic field.

- 2 b) State at least one function and the material used for the following parts of DC Motor.

**Ans:**

**NOTE: Since the parts are not given in question, the marks may please be allotted for any TWO parts**

Part	Function	Material
Yoke	-Provides mechanical support for poles -Acts as protecting cover for machine -Provides path for magnetic flux	Cast Iron OR Cast Steel
Field Winding	-Produce magnetic field in which armature rotates	Copper
Commutator	-Converts AC from armature to DC for generator -Converts DC to AC for motor armature.	Copper segments insulated from each other by mica
Brushes	-To collect current from armature winding of generator & supply current to armature winding of motor.	Carbon
Pole shoe	To spread the flux in air gap.	Cast Iron OR Cast Steel
Pole core	Provides mechanical support to field winding.	Cast Iron OR Cast Steel

1 Mark for function and 1 Mark for material of each of any two parts = 4 Marks

- 2 c) A 3300/250V, 50Hz single phase transformer is built on a core having an effective cross sectional area of 125 cm<sup>2</sup> and 70 turns on the low voltage winding.

Calculate:

- The value of max. flux density.
- Number of turns on high voltage windings.

**Ans:**

**Given Data:**

Cross sectional Area,  $A=125\text{cm}^2 = 125 \times 10^{-4} \text{ m}^2$   
Frequency  $f=50\text{Hz}$ ,  $N_2 = 70$ ,  $E_1 = 3300$ ,  $E_2 = 250$ .

To Find  $B_m$ ,  $N_1$

$$E_2 = 4.44 \Phi_m f N_2 \text{ volt}$$

$$\therefore \Phi_m = \frac{E_2}{4.44 \times f \times N_2} = \frac{250}{4.44 \times 50 \times 70}$$

$$\therefore \Phi_m = 0.016087 \text{ Wb}$$

1 Mark

$$\text{Maximum Flux Density} = B_m = \Phi_m / A = 0.016087 / (125 \times 10^{-4})$$

$$B_m = 1.2869 \text{ Wb/m}^2$$

1 Mark



**Winter – 2019 Examinations**

**Model Answers**

**Subject & Code: Electric Motors and Transformers (22418)**

$$\frac{E_1}{E_2} = \frac{N_1}{N_2} \quad \text{1 Mark}$$

$$\therefore N_1 = \frac{E_1 N_2}{E_2}$$

$$\therefore N_1 = \frac{3300 \times 70}{250} = 924$$

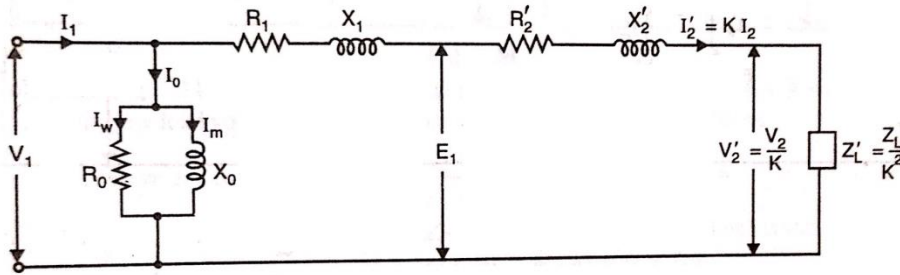
1 Mark

**$N_1 = 924$  turns**

- 2 d) Draw the equivalent circuit of transformer referred to primary. State the meaning of each term related to equivalent circuit.

**Ans:**

**Equivalent Circuit Diagram of Transformer Referred to Primary:**



2 Marks for  
Equivalent  
circuit

- $V_1$  - Primary Input voltage
- $I_1$  - Input Current
- $I_0$  - Exciting current/ No load current
- $I_m$  - Magnetizing component of no load current
- $I_w$  - Working component of no load current
- $R_0$  - Core loss resistance
- $X_0$  - magnetizing reactance
- $R_1$  - Primary winding resistance
- $X_1$  - Primary winding reactance
- $E_1$  - Induced emf in Primary winding
- $R_2'$  - Secondary winding resistance referred to primary
- $X_2'$  - Secondary winding reactance referred to primary
- $I_2$  - Secondary winding current
- $I_2'$  - Primary equivalent of secondary current
- $K$  - Transformation ratio
- $V_2$  - Secondary terminal voltage
- $V_2'$  - Primary equivalent of secondary terminal voltage
- $Z_L$  - Load impedance
- $Z_L'$  - Primary equivalent of load impedance

2 Marks for  
terminology

- 3 Attempt any **THREE** of the following:

12

- 3 a) Explain the necessity of starter for D.C. motor. State various types of D.C. motor starter.

**Ans:**

**Necessity of Starter for D.C. Motor:**

Armature current is given by equation  $I_a = (V - E_b)/R_a$



**Winter – 2019 Examinations**

**Model Answers**

**Subject & Code: Electric Motors and Transformers (22418)**

- i) If the motor is at standstill or rest, back emf  $E_b$  is zero (as  $E_b = \Phi ZNP / (60A)$ , at start speed  $N$  is zero). This causes starting current  $I_a = V/R_a$ , which is large as armature resistance is usually low. This large starting current may damage armature winding due to heavy heating. 3 Marks
- ii) Hence to limit the very high starting current, the starter is required.
- iii) Once motor picks up the speed, the back emf  $E_b$  is induced in armature winding and armature current is limited to safe value. So starter is not required under running condition.

**Types of D.C. motor starters:**

- i) Two point starter 1 Mark  
 ii) Three point starter  
 iii) Four point starter

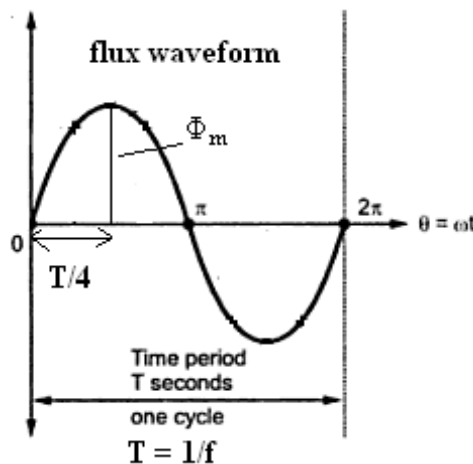
3 b) Derive the emf equation of a transformer.

**Ans:**

**Emf equation of transformer:**

- $N_1$  = No. of turns on primary winding  
 $N_2$  = No. of turns on secondary winding  
 $\Phi_m$  = Maximum value of flux linking both the windings in Wb  
 $f$  = Frequency of supply in Hz

**1<sup>st</sup> method**



1 Mark

Maximum value of flux is reached in time  $t = 1 / 4f$

Avg. rate of change of flux =  $\Phi_m / t = \Phi_m / (1 / 4f) = 4\Phi_m f$  Wb/sec

From faraday's laws of electromagnetic induction

Avg. emf induced in each turn = Avg. rate of change of flux =  $4\Phi_m f$  volt

Form factor = (RMS value) / (Avg. value) = 1.11 for sinusoidal voltage

R.M.S. emf induced in each turn =  $1.11 \times \text{Avg. value} = 1.11 \times 4\Phi_m f$   
 $= 4.44 \Phi_m f$  volt

1 Mark

R.M.S. emf induced in primary winding = (RMS emf / turn)  $\times N_1$

1 Mark



MAHARASHTRA STATE BOARD OF TECHNICAL EDUCATION  
(Autonomous)  
(ISO/IEC-27001-2013 Certified)

Winter – 2019 Examinations

Model Answers

Subject & Code: Electric Motors and Transformers (22418)

$$E_1 = 4.44 \Phi_m f N_1 \text{ volts} \quad 1 \text{ Mark}$$

Similarly,

$$E_2 = 4.44 \Phi_m f N_2 \text{ volts}$$

OR

2<sup>nd</sup> method:

$$\Phi = \Phi_m \sin \omega t$$

According to Faraday's laws of electromagnetic induction

$$\text{Instantaneous value of emf/turn} = -d\Phi/dt = -d/dt (\Phi_m \sin \omega t) \quad 1 \text{ Mark}$$

$$= -\omega \Phi_m \cos \omega t$$

$$= \omega \Phi_m \sin (\omega t - \pi/2) \text{ volts}$$

$$\text{Maximum value of emf/turn} = \omega \Phi_m \quad 1 \text{ Mark}$$

$$\text{But } \omega = 2\pi f$$

$$\text{Max. value of emf/turn} = 2\pi f \Phi_m$$

$$\text{RMS value of emf/turn} = 0.707 \times 2\pi f \Phi_m = 4.44 \Phi_m f \text{ volts} \quad 1 \text{ Mark}$$

$$\text{RMS value of emf in primary winding } E_1 = 4.44 \Phi_m f N_1 \text{ volts} \quad 1 \text{ Mark}$$

$$E_2 = 4.44 \Phi_m f N_2 \text{ volts}$$

3 c) A single phase transformer has 300 turns on its primary side and 750 turns on its secondary side, the maximum flux density in the core is  $1 \text{ Wb/m}^2$ , calculate:

(i) The net cross sectional area of the core,

(ii) The emf induced in the secondary side.

Ans:

(NOTE: The data regarding the supply voltage is not given. Assuming the primary of the transformer is connected to 230V, 50 Hz supply)

Given:  $N_1 = 300$ ,  $N_2 = 750$ ,  $B_m = 1 \text{ Wb/m}^2$

Assumption:  $E_1 = 230 \text{ V}$   $f = 50 \text{ Hz}$

(i) The net cross sectional area of the core,

$$E_1 = 4.44 B_m A f N_1 \text{ volt} \quad 1 \text{ Mark}$$

$$\therefore A = \frac{E_1}{4.44 B_m f N_1} = \frac{230}{4.44 \times 1 \times 50 \times 300}$$

$$A = 3.453 \times 10^{-3} \text{ m}^2 \quad 1 \text{ Mark}$$

(i) The emf induced in the secondary side.

$$E_2/E_1 = N_2/N_1 \quad 1 \text{ Mark}$$

$$E_2/230 = 750/300$$

$$E_2 = 575 \text{ volt}$$

(NOTE: Examiners are requested to award the marks for the procedure followed by the student for any assumed data) 1 Mark

3 d) Compare core type and shell type transformer.

Ans:



**Winter – 2019 Examinations**

**Model Answers**

**Subject & Code: Electric Motors and Transformers (22418)**

**Comparison of core type and shell type transformer:**

Sr. No.	Core type	Shell type
1		
2	It has one window	It has two windows
3	It has one magnetic circuit.	It has two magnetic circuits.
4	Winding surrounds the core.	Core surrounds the winding.
5	Average length of core is more.	Average length of core is less.
6	Area of cross section is less so more turns are required.	Area of cross section is more so less turns are required.
7	Better cooling for winding	Better cooling for core
8	Mechanical strength is less	Mechanical strength is high
9	Repair and maintenance is easy	Repair and maintenance is difficult
10	Application: Low current, high voltage	Application: High current, low voltage

Each point  
1 Mark  
(any four points)  
= 4 Marks

**4 Attempt any THREE of the following:**

**12**

- 4 a) Give any four selection criteria for :
- i) Distribution transformer
  - ii) Power transformer

**Ans:**

**Selection Criteria for Distribution Transformer:**

- i) **Ratings** - The kVA ratings should comply with IS:2026 ( Part 1 )-1977\*. The no-load secondary voltage should be 433 volts for transformers to be used in 415 V system. Voltage should be normally in accordance with IS:585-1962 except for special reasons when other values may be used.
- ii) **Taps** -The transformers of these ratings are normally provided with off-circuit taps on HV side except in special cases when on-load tap changers are specified. The standard range for off-circuit taps which are provided on HV side should be of 2.5 percent and of 5.0 percent. In case of on-load tap changers, the taps may be in steps of 1.25 percent with 16 steps. The positive and negative taps shall be specified to suit the system conditions in which the transformer is to be operated.
- iii) **Connection Symbol** - The two winding transformers should be preferably connected in delta/star in accordance with IS:2026 (Part 4)-1977s. The exact connection symbol (Dyn11 or Dyn1) is to be specified depending upon requirements of parallel operation.

1 Mark for each of any two criteria  
= 2 Marks





Winter – 2019 Examinations

Model Answers

**Subject & Code: Electric Motors and Transformers (22418)**

- iv) **Impedance** - Consideration shall be given in the selection of impedance for the standard available rating of the switchgear on the secondary side and associated voltage drops.
- v) **Termination Arrangement** - The HV and LV terminals may be bare outdoor bushings, cable boxes or bus trunking depending upon the method of installation. Wherever compound filled cable boxes are used, it is preferable to specify disconnecting chamber between transformer terminals and cable box to facilitate disconnection of transformer terminals without disturbing the cable connections (see also IS:9147-1979). In case of extruded insulation cables with connections in air, a separate disconnecting chamber is not necessary.
- vi) **Cooling** - The transformers covered in this group are generally ONAN, AN

**Selection Criteria for Power Transformer:**

- 1) **Ratings** - The kVA ratings should comply with IS:10028 (Part 1)-1985. The no-load secondary voltage should be 5 % more than nominal voltage to compensate the transformer regulation partly. The transformer required to be operated in parallel, the voltage ratio should be selected in accordance with guidelines given in 12.0.1 & 12.0.1.1 of IS:10028 (Part 1)-1985
- 2) **Taps** - On-Load tap changers on HV side should be specified, wherever system conditions warrant. In case of OLTC, total number of taps should be 16 in steps of 1.25 %. The standard range for off-circuit taps which are provided should be in range of + 2.5 percent and + 5 percent.
- 3) **Connection Symbol** - The preferred connections for two winding transformers should be preferably connected in delta/star (Dyn) and star/star (YNyn). For higher voltage connections star/star (YNyn) or star/delta (YNd) may be preferred accordance with IS:10028 (Part 1)-1985.
- 4) **Impedance** -The transformer impedance is decided taking into consideration the secondary fault levels and voltage dip. The typical values are given in table 3 of IS:2026.
- 5) **Termination Arrangement** - The HV and LV terminals may be bare outdoor bushings, cable boxes or bus trunking depending upon the method of installation. Wherever compound filled cable boxes are used, it is preferable to specify disconnecting chamber between transformer terminals and cable box to facilitate disconnection of transformer terminals without disturbing the cable connections (see also IS:9147-1979). In case of extruded insulation cables with connections in air, a separate disconnecting chamber is not necessary.
- 6) **Cooling** - The transformers covered in this group are generally ONAN, ONAN/ONAF, ONAN/ONAF/OFAF.

1 Mark for  
each of any  
two criteria  
= 2 Marks

- 4 b) With the help of neat diagram, describe the procedure to carry out phasing out test on a

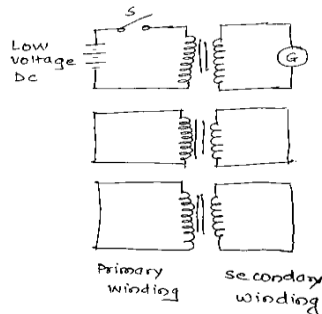
**Winter – 2019 Examinations**

**Model Answers**

**Subject & Code: Electric Motors and Transformers (22418)**

3-phase transformer. Also state the purpose of conducting this test on 3 phase transformer.

**Ans:**



i) This test is carried out on 3-ph transformer to identify primary & secondary winding belonging to the same phase.

ii) As shown in fig above all primary & secondary phases are short circuited except the phases to be checked.

iii) Low voltage DC supply is given to primary winding. The galvanometer is connected to terminals of secondary winding which is not short-circuited.

iv) The switch 'S' is connected as shown in fig. When switch is closed, deflection of galvanometer is observed.

v) Similarly galvanometer is connected to other secondary terminals and procedure is repeated. The winding across which maximum deflection occurs is the secondary phase winding that corresponds to primary winding to which source is connected.

vi) The procedure is repeated for remaining primary windings.

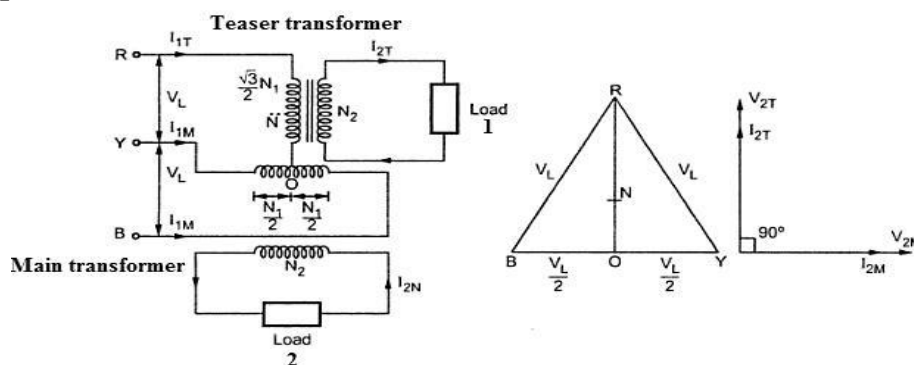
vii) Phasing out test can be carried out by using AC voltage source also. Voltmeter is connected at secondary terminals to observe deflections.

The purpose of this test is to check the respective phases of primary & secondary windings in 3-ph transformer.

4 c) Explain with the neat circuit diagram only the scott connection scheme for conversion of three phase supply to two phase supply. Name one application of the same.

**Ans:**

**Three-phase to Two-phase Transformation (Scott Connection of Transformers):**



1 Marks for diagram

**Working:**

i) Scott connection can be used for three-phase to two-phase conversion using two single-phase transformers.

ii) Scott connection for three-phase to two-phase conversion is as shown in figure.

iii) Point 'O' is exactly at midpoint of winding connected between phases Y & B.

iv) The no. of turns of primary winding will be  $\frac{\sqrt{3}}{2}N_1$  for Teaser and  $N_1$  for main transformer. The no. of secondary turns for both the transformers are  $N_2$ .

2 Marks for explanation



**Winter – 2019 Examinations**

**Model Answers**

**Subject & Code: Electric Motors and Transformers (22418)**

- v) When three-phase supply is given to primary, two-phase emfs are induced in secondary windings as per turns ratio & mutual induction action.
- vi) It is seen that the voltage appearing across the primary of main transformer is  $V_{1M} = V_L$ , i.e. line voltage. The voltage induced in secondary of main transformer is  $V_{2M}$  which is related to  $V_{1M}$  by turns ratio  $N_1:N_2$ .
- vii) From phasor diagram it is clear that the voltage appearing across the primary of Teaser transformer corresponds to phasor RO which is  $\frac{\sqrt{3}}{2}$  times the line voltage  $V_L$ . Due to this limitation, the turns selected for primary of Teaser transformer are not  $N_1$  but  $\frac{\sqrt{3}}{2} N_1$ . This makes the volts per turn in teaser transformer same as that in main transformer and results in voltage induced in secondary of teaser transformer same as that in main transformer, i.e.  $V_{2T} = V_{2M}$ .  
As seen from the phasor diagram, the output voltages to the two loads are identical.

**Applications:**

- i) The Scott-T connection is used in an electric furnace installation where it is desired to operate two single-phase loads together and draw the balanced load from the three-phase supply.
- ii) It is used to supply the single phase loads such as electric train which are so scheduled as to keep the load on the three phase system balanced as nearly as possible.
- iii) The Scott-T connection is used to link a 3-phase system with a two-phase system with the flow of power in either direction.

1 Mark for any one application

- 4 d) In 20 kVA, 1000/400 V, 1-ph, 50Hz transformer, iron and full load copper losses are 300 W & 500W respectively. Calculate the efficiency at  $\frac{3}{4}$  full load at unity power factor.

**Ans:**

**Given Data:**

T/F rating 20 kVA, 1000/400V, 1ph, 50Hz.

F.L.Cu loss = 500W Iron Loss = 300W,

For  $\frac{3}{4}$  full-load,  $x = \frac{3}{4}$

Cu loss =  $(x)^2 \times$  Full-load Cu loss =  $(\frac{3}{4})^2 \times 500 = 281.25W = 0.28125kW$

1 Mark

T/F Output =  $\frac{3}{4} \times 20 = 15kVA$

1 Mark

Total losses at  $\frac{3}{4}$  full-load =  $300 + 281.25 = 581.25 = 0.58125 kW$

%  $\eta$  at unity pf and  $\frac{3}{4}$  full-load =  $\frac{\text{Output} \times \text{p.f} \times 100}{\text{output} \times \text{p.f} + \text{Losses}}$

1 Mark

$$= \frac{15 \times 1 \times 100}{15 \times 1 + 0.58125} = 96.27\%$$

**%  $\eta = 96.27 \%$**

1 Mark



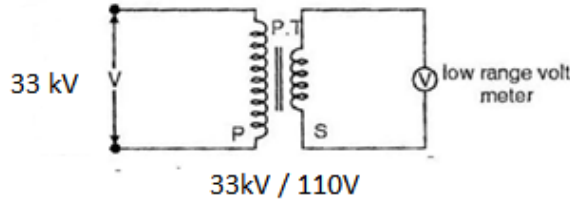
**Winter – 2019 Examinations**

**Model Answers**

**Subject & Code: Electric Motors and Transformers (22418)**

4 e) Explain with circuit diagram use of potential transformer to measure 33kV.

**Ans:**



2 Marks for circuit diagram

**Circuit Diagram of PT:**

- i) Higher voltage '33kV' is the voltage to be measured
- ii) Primary of PT is connected across this voltage
- iii) PT is step down transformer
- iv) Due to PT, voltage across voltmeter gets reduced by a factor equal to the turns ratio of PT. Hence low range voltmeter is used to measure voltage.
- v) The secondary voltage is given by,  
 $V_2 = V_1 \times (N_2/N_1)$

2 Marks for explanation

The secondary voltage of PT is standardized to 110V. The ratio of PT required for this measurement is  $(33000/110) = 300:1$

**5 Attempt any TWO of the following:**

**12**

5 a) A 250V shunt motor on no load runs at 1000 rpm and takes 5 A. The total armature and shunt field resistance are respectively  $0.2\Omega$  and  $250\Omega$ . Calculate the speed when loaded and taking a current of 50A, if armature reaction weakens on field by 3%.

**Ans:**

Motor I/P current,  $I_{L1} = 5A$  at no-load

$$\begin{aligned} \text{Field current, } I_{f1} &= (\text{Applied voltage/Field resistance}) \\ &= 250/250 \\ &= 1A \end{aligned}$$

1 Mark

$$\begin{aligned} \text{Armature current } I_{a1} &= \text{Motor I/P current} - \text{Field current} \\ &= 5 - 1 = 4A \end{aligned}$$

At a load current of 50A, the armature reaction weakens the field by 3%,

The back emf  $E = K\phi N$ , where K is proportionality constant and  $E = V - I_a R_a$

$$\begin{aligned} \frac{E_1}{E_2} &= \frac{\phi_1 N_1}{\phi_2 N_2} \\ N_2 &= \frac{\phi_1 N_1 E_2}{\phi_2 E_1} \end{aligned}$$

1 Mark

The armature current on load is given by,

$$\begin{aligned} I_{a2} &= I_{L2} - I_{f2} \\ &= 50 - 1 = 49A \end{aligned}$$

1 Mark

Due to armature reaction, the field is weakened by 3%,

$$\therefore \phi_1 = 1 \text{ and } \phi_2 = 0.97$$

1 Mark

$$\therefore N_2 = \frac{(1)(1000)(V - I_{a2}R_a)}{(0.97)(V - I_{a1}R_a)}$$

1 Mark



**MAHARASHTRA STATE BOARD OF TECHNICAL EDUCATION**  
(Autonomous)  
(ISO/IEC-27001-2013 Certified)

**Winter – 2019 Examinations**

**Model Answers**

**Subject & Code: Electric Motors and Transformers (22418)**

$$\therefore N_2 = \frac{(1)(1000)[250 - 49 \times 0.2]}{(0.97)[250 - 4 \times 0.2]}$$

$$\therefore N_2 = \frac{240200}{241.724}$$

1 Mark

$$\therefore N_2 = 993.69 \text{ rpm}$$

- 5 b) List the Conditions for parallel operation of three phase transformer.

**Ans:**

**Conditions for Parallel operation of 3 phase transformer:**

- 1) Voltage ratings of both the transformers must be identical.
- 2) Phase sequence of both must be same.
- 3) Transformer connections must be carried out polarity wise.
- 4) Vector group of both the transformers must be same.
- 5) Percentage / p.u. impedances should be equal in magnitude.
- 6) X/R ratio of the transformer windings should be equal.

1 Mark for each of any six conditions = 6 Marks

- 5 c) A 500kVA, distribution transformer having copper and iron losses of 5kW and 3kW respectively on full load. The transformer is loaded as shown below:

Loading (KW)	Power Factor (lag)	No. of hrs.
400	0.8	06
300	0.75	12
100	0.8	03
No load	-----	03

Calculate the all day efficiency.

**Ans:**

The problem can be solved by using following steps:

- Step-I Calculate output energy in KWh
- Step-II : Convert the loading from kW to KVA
- Step-III : Calculate copper losses at different KVA values
- Step-IV: Calculate copper losses in 24 hours
- Step-V: Calculate iron losses in 24 hours
- Step-VI: Calculate All day efficiency

No of Hrs	Load in KW	P.F.	Output energy in kWh = $\frac{\text{load in KW}}{\text{P.F.}} \times \text{No. of hrs}$	Load in KVA = $\frac{\text{Load in KW}}{\text{COS}\phi}$	Copper Losses/hr = Losses at F.L. $\times \left(\frac{\text{ActualKVA}}{\text{RatedKVA}}\right)^2$	Total cu Losses in kWh	Total Iron losses
06	400	0.8	2400	$\frac{400}{0.8}=500$	$5 \text{ kw} \times \left(\frac{500}{500}\right)^2 = 5 \text{ kw}$	$5 \times 6 \text{ hr} = 30 \text{ kWh}$	3kW × 24hr
12	300	0.75	3600	$\frac{300}{0.75}=400$	$5 \text{ kw} \times \left(\frac{400}{500}\right)^2 = 3.2 \text{ kw}$	38.4	
03	100	0.8	300	$\frac{100}{0.8}=125$	$5 \text{ kw} \times \left(\frac{125}{500}\right)^2 = 0.3125 \text{ kw}$	0.9375	

1 Mark for each row calculations = 4 Marks



**Winter – 2019 Examinations**

**Model Answers**

**Subject & Code: Electric Motors and Transformers (22418)**

03	0	-	-	0	0	0		
Total			<b>6300kwh</b>				<b>69.337kwh</b>	<b>72kwh</b>

$$\begin{aligned} \text{Efficiency}_{\text{All day}} &= \frac{\text{Output Energy in 24 hrs}}{\text{Output Energy in 24 Hrs} + \text{Losses in 24 Hrs}} \\ &= \frac{6300}{6300 + 69.337 + 72} = \frac{6300}{6441.337} = 0.978 \end{aligned}$$

1 Mark

$$\% \text{ Efficiency}_{\text{All day}} = 97.8 \%$$

1 Mark

**6 Attempt any TWO of the following:**

**12**

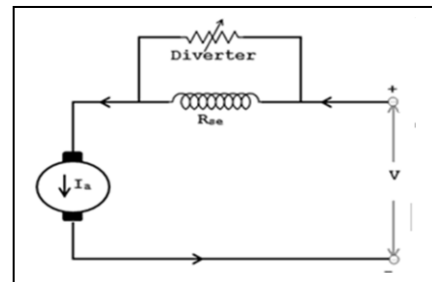
6 a) Explain with the help of neat diagram, the following methods of speed control for DC series motor.

- i) Field diverter method.
- ii) Tapped field method.

**Ans:**

**i) Field diverter method:**

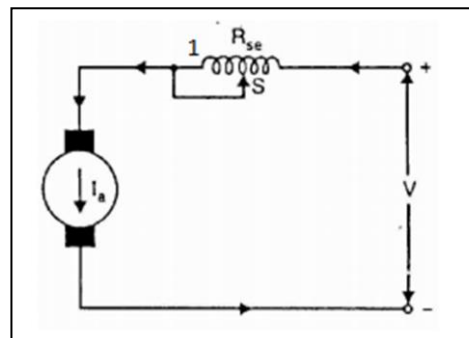
- Resistance connected in parallel with field winding.
- By adjusting this resistance current can be diverted from field winding.
- Thus field current decreases and the speed can be increased above rated speed.



3 Marks

**ii) Tapped field method :**

- Selector switch is moved from position 1 onwards.
- The number of field turns decreases which decrease mmf.
- Hence the speed increases above the rated speed.



3 Marks

6 b) Explain with the help of neat diagram working of 3 phase autotransformer. Write any two application.

**Ans:**

**Working of three phase autotransformer:**

- Working principle of Auto-transformer is based on self-induction.
- When three-phase ac supply is given to star connected three windings, flux is produced and gets linked with each phase winding. The emf is induced in it according to self-induction.
- As only one winding per phase is available, part of it acts as secondary between

3 Marks



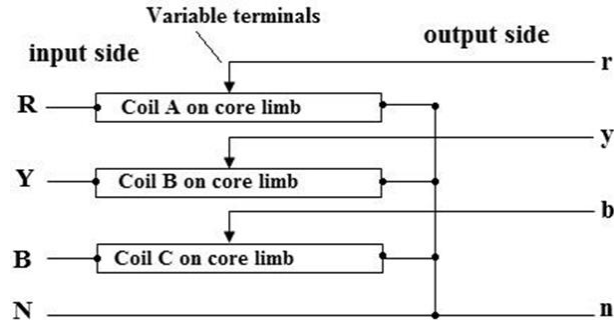
Winter – 2019 Examinations

Model Answers

Subject & Code: Electric Motors and Transformers (22418)

variable terminal and neutral.

- Depending upon the position of variable terminal, we get variable AC voltage at the output.



2 Marks

**Applications:**

- 1) It is used as power transformer in transmission system for 110kV, 132kV and 220kV voltage levels
- 2) It is used as autotransformer starter for starting high capacity motors.

1 Mark for two applications

- 6 c) Explain the effect of Harmonics on the Transformer.

**Ans:**

**Effect of Harmonics on the Transformer:**

**1. Core loss:** Harmonic voltage increases the hysteresis and eddy current losses in the lamination. The amount of the core loss depends on harmonic present in supply voltage.

2 Marks for each of any three effects = 6 Marks

**2. Copper loss:** Harmonic current increases copper loss. The loss mainly depends on the harmonics present in the load and effective ac resistance of the winding. Copper loss increase temperature and create hot spots in that transformer. The effect is prominent in the case of converter transformers. These transformers do not benefit from the presence of filters as filter are normally connected on the AC. system side.

**3. Stress:** Voltage harmonics increase stresses of the insulation,

**4. Core vibration:** Current and voltage harmonics increase small core vibrations.

**5. Saturation problem:** Sometimes additional harmonic voltage causes core saturation.